
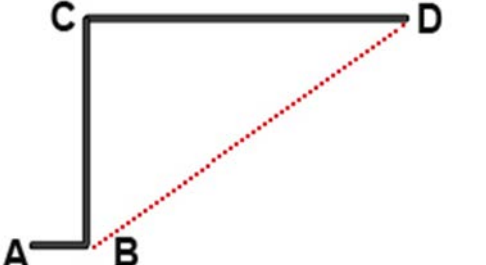


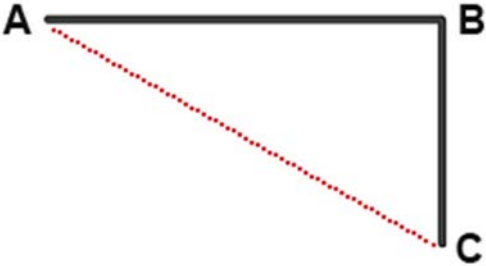
Bay Style 1

	<p>Left Handed L-shaped Bay Window</p> <p>A to B = _____</p> <p>B to C = _____</p> <p>A to C = _____</p>
---	---

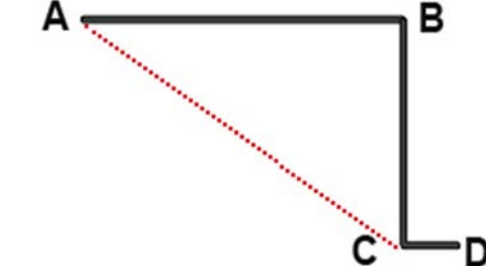
Bay Style 2

	<p>Left Handed L-shaped Bay Window with Return</p> <p>A to B = _____</p> <p>B to C = _____</p> <p>C to D = _____</p> <p>B to D = _____</p>
---	---

Bay Style 3

	<p>Right Handed L-shaped Bay</p> <p>A to B = _____</p> <p>B to C = _____</p> <p>A to C = _____</p>
---	---

Bay Style 4

	<p>Right Handed L-shaped Bay Window with return</p> <p>A to B = _____</p> <p>B to C = _____</p> <p>C to D = _____</p> <p>A to C = _____</p>
---	--

Bay Style 5

	<p>Square Bay Window</p> <p>A to B = _____</p> <p>B to C = _____</p> <p>C to D = _____</p> <p>A to D = _____</p> <p>A to C = _____</p> <p>B to D = _____</p>
--	---

Bay Style 6

	<p>Square Bay Window with returns</p> <p>A to B = _____</p> <p>B to C = _____</p> <p>C to D = _____</p> <p>D to E = _____</p> <p>E to F = _____</p> <p>B to E = _____</p> <p>B to D = _____</p> <p>C to E = _____</p>
--	--

Bay Style 7

	<p>Angled Bay</p> <p>A to B = _____</p> <p>B to C = _____</p> <p>C to D = _____</p> <p>A to D = _____</p> <p>A to C = _____</p> <p>B to D = _____</p>
<p>Angle B = _____ Angle C = _____</p>	

Bay Style 8

	<p>Angled Bay Window with returns</p> <p>A to B = _____</p> <p>B to C = _____</p> <p>C to D = _____</p> <p>D to E = _____</p> <p>E to F = _____</p> <p>B to E = _____</p> <p>B to D = _____</p> <p>C to E = _____</p>
<p>Angle B = _____ Angle C = _____</p> <p>Angle D = _____ Angle E = _____</p>	

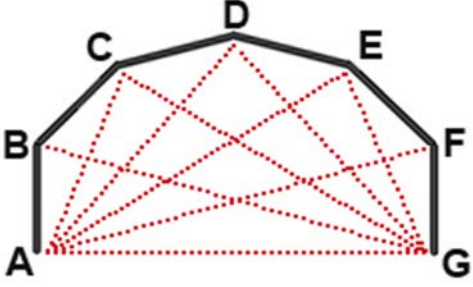
Bay Style 9

	<p>5 Sided Bay Window</p> <p>A to B = _____ B to C = _____ C to D = _____ D to E = _____ E to F = _____ A to C = _____ A to D = _____ A to E = _____ A to F = _____ B to F = _____ C to F = _____ D to F = _____</p> <p>Angle B= _____ Angle C= _____ Angle D= _____ Angle E= _____</p>
--	--

Bay Style 10

	<p>5 Sided Bay Window with returns</p> <p>A to B = _____ B to C = _____ C to D = _____ D to E = _____ E to F = _____ F to G = _____ G to H = _____ B to G = _____ B to D = _____ B to E = _____ B to F = _____ C to G = _____ D to G = _____ E to G = _____</p> <p>Angle B= _____ Angle C= _____ Angle D= _____ Angle E= _____ Angle F= _____ Angle G= _____</p>
--	---

Bay Style 11



6 Sided Bay Window

A to B = _____

B to C = _____

C to D = _____

D to E = _____

E to F = _____

F to G = _____

A to G = _____

A to C = _____

A to D = _____

A to E = _____

A to F = _____

B to G = _____

C to G = _____

D to G = _____

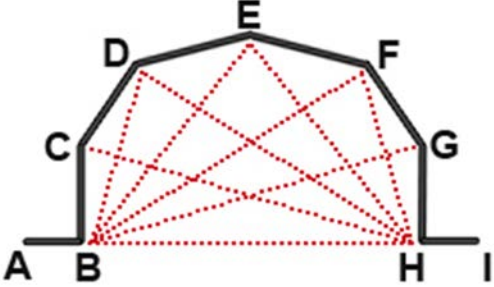
E to G = _____

Angle B= _____ Angle C= _____

Angle D= _____ Angle E= _____

Angle F= _____

Bay Style 12



6 Sided Bay Window with returns

A to B = _____

B to C = _____

C to D = _____

D to E = _____

E to F = _____

F to G = _____

G to H = _____

H to I = _____

B to H = _____

B to D = _____

B to E = _____

B to F = _____

B to G = _____

C to H = _____

D to H = _____

E to H = _____

F to H = _____

Angle B= _____ Angle C= _____

Angle D= _____ Angle E= _____

Angle F= _____ Angle G= _____

Angle H= _____